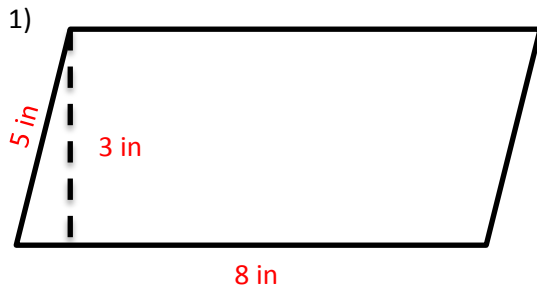


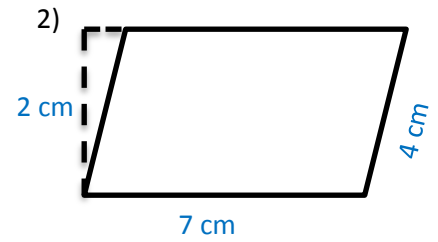
Area and Perimeter of Parallelograms

Find the area and perimeter of each parallelogram. Use correct labels



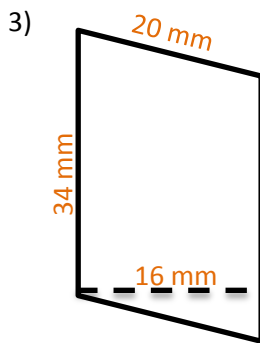
Area: _____

Perimeter: _____



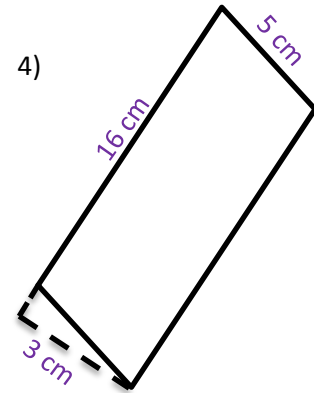
Area: _____

Perimeter: _____



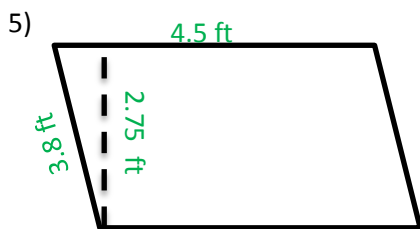
Area: _____

Perimeter: _____



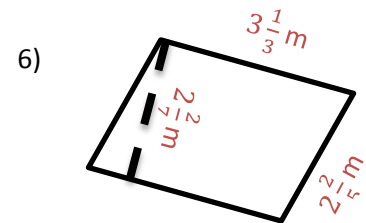
Area: _____

Perimeter: _____



Area: _____

Perimeter: _____



Area: _____

Perimeter: _____