


Name _____

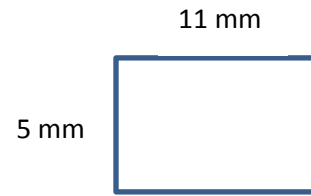
Date _____

Area and Perimeter Practice

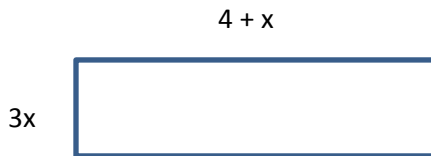
1) Find the perimeter of the rectangle.



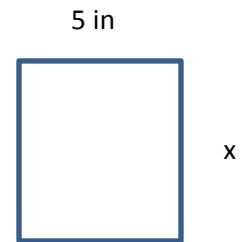
2) Find the area of the rectangle.



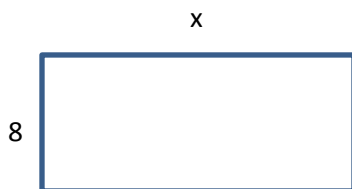
3) Find the perimeter of the rectangle.



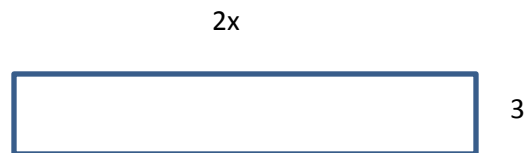
4) Find the area of the rectangle.



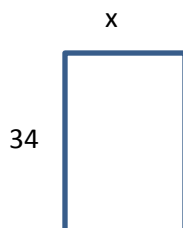
5) Find the missing side length if the perimeter is 80 cm.



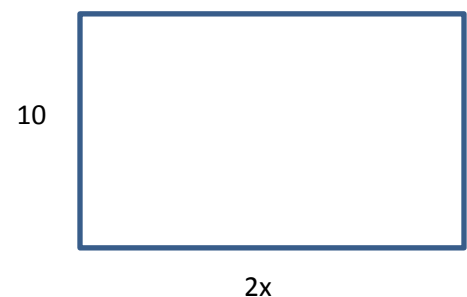
6) Find the missing side length and value of x . The area is 90 cm^2 .



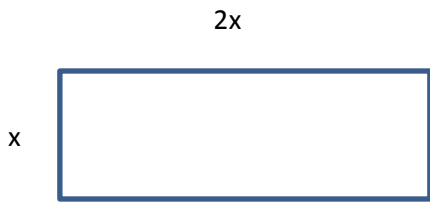
7) Find the missing side length if the perimeter is 120 m.



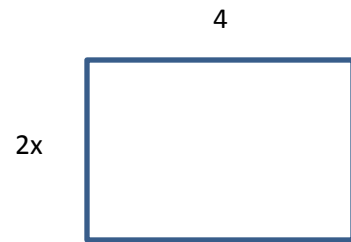
8) Find the missing side length if the area is 60 cm^2 .




9) Find the missing side lengths if the perimeter is 102 in.



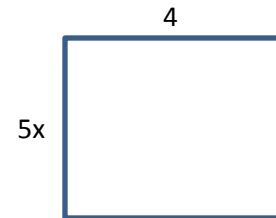
10) Find the missing side length and the value of x . The area is 84 yd^2



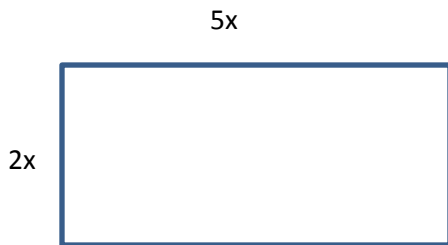
11) Find the missing side lengths if the perimeter is 144 ft.



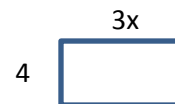
12) Find the missing side length and the value of x . The area is 120 mm^2



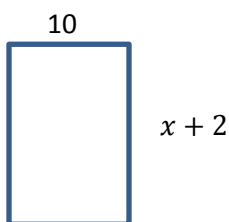
13) Find the missing side lengths and the value of x . The perimeter is 112 in.



14) Find the missing side length if the area is 144 mi^2



15) Find the missing side length and the value of x . The perimeter is 80 ft.



Challenge:

16) Find the missing side length and the value of x . The area is 160 mi^2 .

