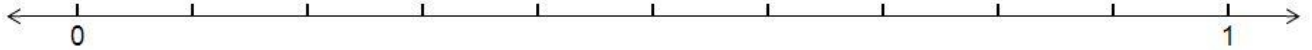


Name: _____

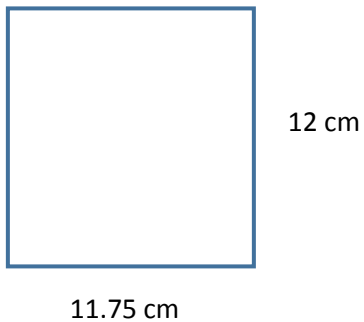
Decimals ~Number Line and Area

1. Place 0.63 on the number line below.




Solve for the unknown values.

2.




Area = _____

3.



Area = _____

4.




Perimeter = 26.4 in

Width = _____

Area = _____

5.



Perimeter = 30.7 m

Width = _____

Area = _____