

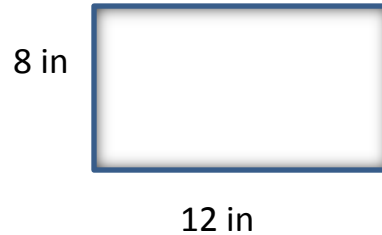
Name _____

Date _____


Perimeter with Decimals

Perimeter:

1) Find the perimeter of the rectangle. To find the perimeter you must _____ all _____ side lengths.

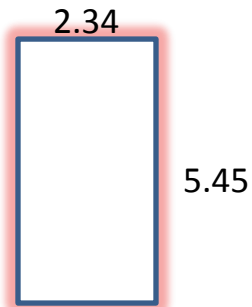


2) Find the perimeter of the rectangle. All units are in inches.



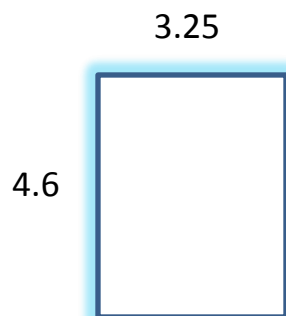
State your answer with a label:

3) Find the perimeter of the rectangle. All units are in centimeters.



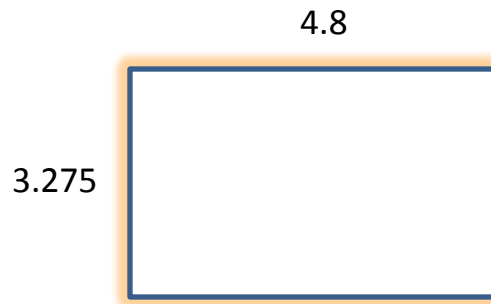
State your answer with a label:

4) Find the perimeter of the rectangle. All units are in meters.



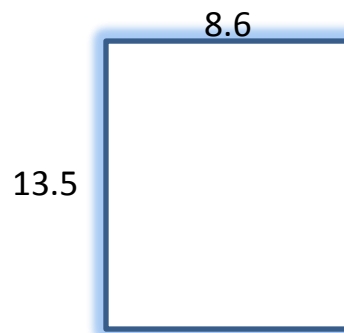
State your answer with a label:

5) Find the perimeter of the rectangle. All units are in feet.




State your answer with a label:

6) Find the perimeter of the rectangle. All units are in yards.



State your answer with a label:

7) Find the perimeter of the rectangle. All units are in inches.



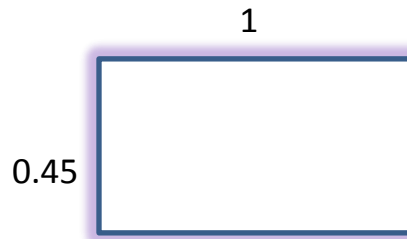
State your answer with a label:

8) Find the perimeter of the rectangle. All units are in centimeters.




State your answer with a label:

9) Find the perimeter of the rectangle. All units are in feet.



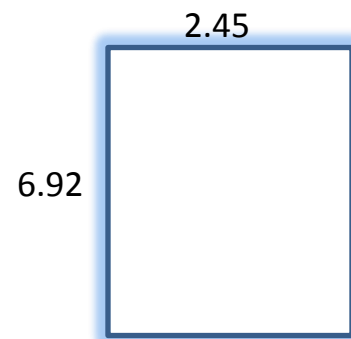
State your answer with a label:

10) Find the perimeter of the rectangle. All units are in meters.




State your answer with a label:

11) Find the perimeter of the rectangle. All units are in kilometers.



State your answer with a label:

4) Find the perimeter of the rectangle. All units are in miles.



State your answer with a label: