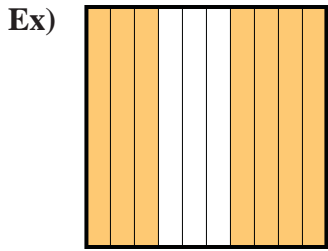


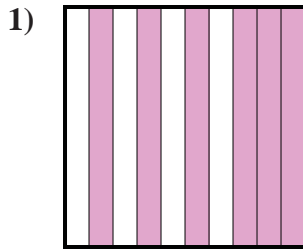


Determine the value written as a fraction , decimal & a percent.


Answers



Fraction $\frac{7}{10}$
 Decimal 0.7
 Percent 70%



Fraction _____
 Decimal _____
 Percent _____



Fraction _____
 Decimal _____
 Percent _____

Ex. $\frac{7}{10}$ 0.7 70%

1. _____

2. _____

3. _____

4. _____

5. _____

6. _____

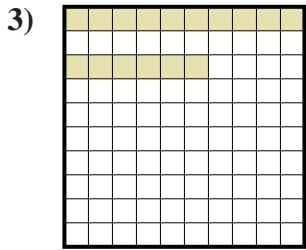
7. _____

8. _____

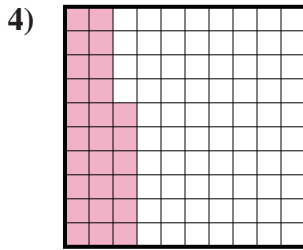
9. _____

10. _____

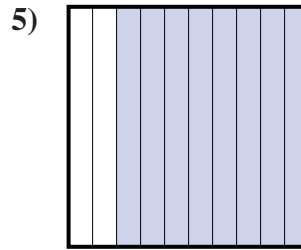
11. _____



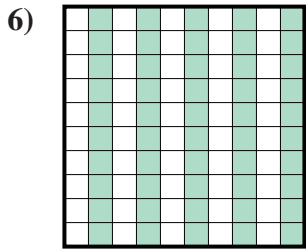
Fraction _____
 Decimal _____
 Percent _____




Fraction _____
 Decimal _____
 Percent _____



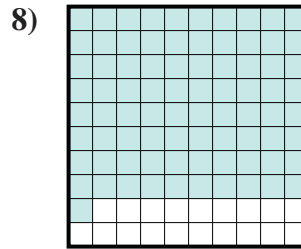
Fraction _____
 Decimal _____
 Percent _____



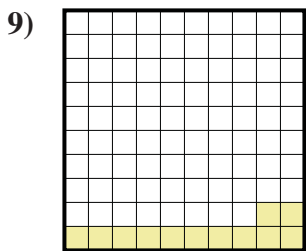
Fraction _____
 Decimal _____
 Percent _____



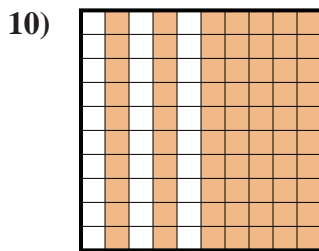
Fraction _____
 Decimal _____
 Percent _____



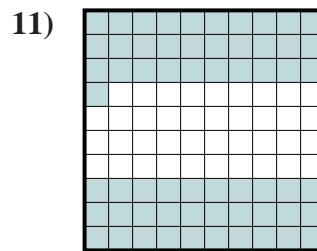
Fraction _____
 Decimal _____
 Percent _____



Fraction _____
 Decimal _____
 Percent _____



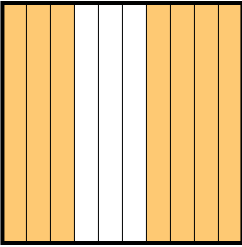
Fraction _____
 Decimal _____
 Percent _____



Fraction _____
 Decimal _____
 Percent _____



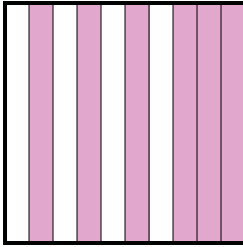
Determine the value written as a fraction , decimal & a percent.

Ex) 

Fraction $\frac{7}{10}$

Decimal 0.7

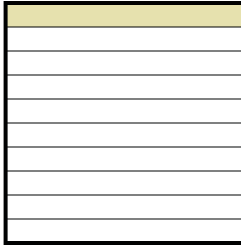
Percent 70%

1) 

Fraction $\frac{6}{10}$

Decimal 0.6

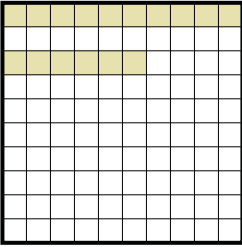
Percent 60%

2) 

Fraction $\frac{1}{10}$

Decimal 0.1

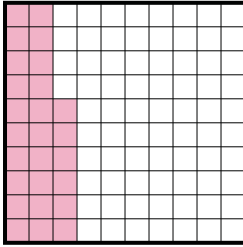
Percent 10%

3) 

Fraction $\frac{16}{100}$

Decimal 0.16


Percent 16%

4) 

Fraction $\frac{26}{100}$

Decimal 0.26

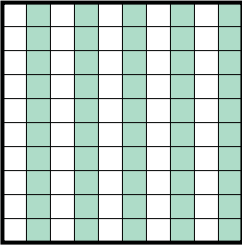
Percent 26%

5) 

Fraction $\frac{8}{10}$

Decimal 0.8


Percent 80%

6) 

Fraction $\frac{50}{100}$

Decimal 0.50

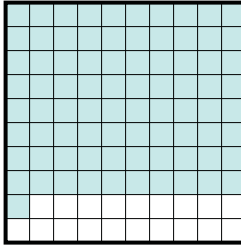
Percent 50%

7) 

Fraction $\frac{5}{10}$

Decimal 0.5

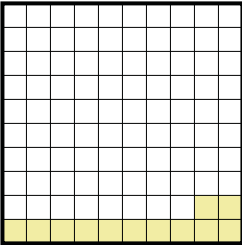
Percent 50%

8) 

Fraction $\frac{81}{100}$

Decimal 0.81

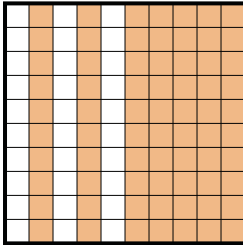
Percent 81%

9) 

Fraction $\frac{12}{100}$

Decimal 0.12

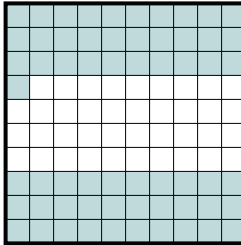
Percent 12%

10) 

Fraction $\frac{70}{100}$

Decimal 0.70

Percent 70%

11) 

Fraction $\frac{61}{100}$

Decimal 0.61

Percent 61%

Answers

- Ex. $\frac{7}{10}$ **0.7** **70%**
1. $\frac{6}{10}$ **0.6** **60%**
2. $\frac{1}{10}$ **0.1** **10%**
3. $\frac{16}{100}$ **0.16** **16%**
4. $\frac{26}{100}$ **0.26** **26%**
5. $\frac{8}{10}$ **0.8** **80%**
6. $\frac{50}{100}$ **0.50** **50%**
7. $\frac{5}{10}$ **0.5** **50%**
8. $\frac{81}{100}$ **0.81** **81%**
9. $\frac{12}{100}$ **0.12** **12%**
10. $\frac{70}{100}$ **0.70** **70%**
11. $\frac{61}{100}$ **0.61** **61%**