

Name: _____


Date: _____

Finding Perimeter

Decimal Side Lengths

Find the perimeter of each rectangle. Be sure to include a label.


1)



Work Space:

Perimeter: _____

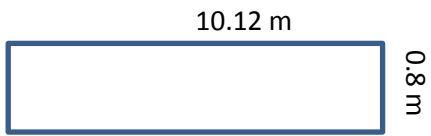
2)



Work Space:

Perimeter: _____

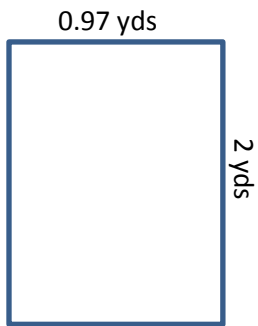
3)



Work Space:

Perimeter: _____

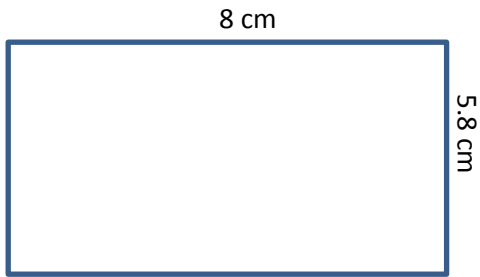
4)



Work Space:

Perimeter: _____


5)



Work Space:

Perimeter: _____

5)



Work Space:

Perimeter: _____