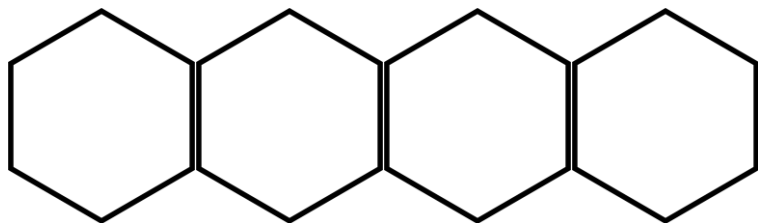


Name: _____

Date: _____

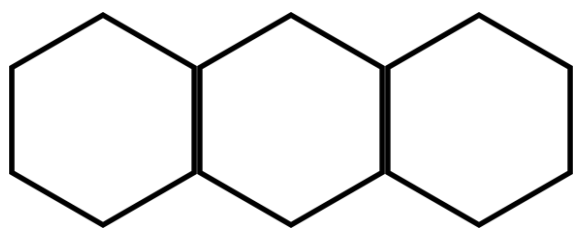
Subtracting Fractions with Regrouping

1)



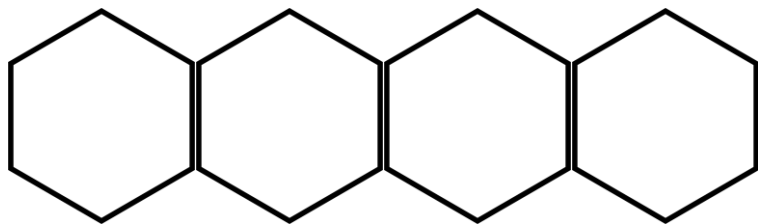
$$\begin{array}{r} 4\frac{1}{6} \\ - 2\frac{5}{6} \\ \hline \end{array}$$

2)



$$\begin{array}{r} 3\frac{1}{3} \\ - 1\frac{2}{3} \\ \hline \end{array}$$

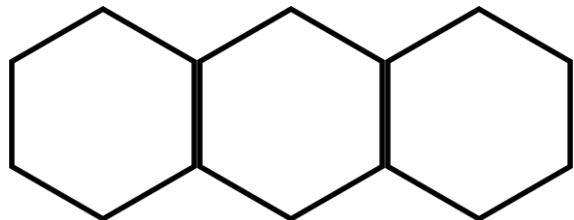
3)



$$4\frac{1}{6}$$

$$- 1\frac{1}{2}$$

4)



$$3\frac{1}{2}$$

$$- 2\frac{2}{3}$$
