

Name _____

Date _____

Writing Expressions with Bags and Blocks

Write an expression to represent each bag/block model.


1) Expression: _____




2) Expression: _____



3) Expression: _____




4) Expression: _____




5) Expression: _____



6) Expression: _____



7) Expression: _____




8) Expression: _____



9) Expression: _____



10) Expression: _____



Draw a bag/block model to represent the expression.

1) $4x + 3$

2) $2x + 3$

3) $3x + 1$

4) $5x + 1$

5) $x + 2$

6) $4x + 5$

7) $3x + 7$

8) $x + 9$

9) $2x + 4$

10) $6x$