

Name _____


Date _____

Ratios

Write each ratio 3 ways.

Write the ratio of suns to hearts _____

Write the ratio of hearts to suns _____




Write the ratio of smiley faces to lightening bolts _____

Write the ratio of lightening bolts to smiley faces _____



Write the ratio of moons to clouds _____

Write the ratio of clouds to moons _____




Write the ratio of cylinders to cubes _____

Write the ratio of cubes to cylinders _____

Write the ratio of cylinders to shapes _____

Write the ratio of cubes to shapes _____



Write the ratio of octopi to sea turtles _____



Write the ratio of sea turtles to octopi _____

Write the ratio of octopi to sea creatures _____



Write the ratio of sea creatures to sea turtles _____




Write the ratio of owls to chickens _____

Write the ratio of chickens to foxes _____

Write the ratio of birds to foxes _____

Write the ratio of foxes to animals _____



Write the ratio of soccer balls to footballs _____

Write the ratio of hockey pucks to basketballs _____

Write the ratio of soccer balls to sports equipment _____

Write the ratio of footballs to balls _____

